

Chapter 01 - Real Numbers

- Q01. The smallest prime number is
 (a) 0 (b) 1 (c) 2 (d) 3
- Q02. The sum of first five prime numbers is
 (a) 26 (b) 15 (c) 39 (d) 28
- Q03. Total prime numbers between 1 and 100 are
 (a) 31 (b) 25 (c) 22 (d) 20
- Q04. The unit's digit obtained on simplifying $207 \times 781 \times 39 \times 94$ is
 (a) 9 (b) 1 (c) 7 (d) 2
- Q05. The number $\sqrt{3}$ is a/an
 (a) integer (b) rational no. (c) irrational no. (d) None of these
- Q06. The HCF and LCM of 6, 72 and 120 is, respectively
 (a) 8, 360 (b) 6, 340 (c) 6, 360 (d) None of these
- Q07. The total number of even prime numbers is
 (a) 0 (b) 1 (c) 2 (d) infinite
- Q08. $\frac{22}{7}$ is a
 (a) prime no. (b) an integer (c) a rational no. (d) an irrational no.
- Q09. The sum of two numbers is 37 and their product is 342. The numbers are
 (a) 18, 19 (b) 23, 14 (c) 24, 13 (d) 28, 9
- Q10. A number is as bigger than 22 as much it is smaller than 72. The number is
 (a) 92 (b) 47 (c) 24 (d) None of these
- Q11. If HCF and LCM of two numbers are 4 and 9696, then the product of two numbers is
 (a) 9696 (b) 24242 (c) 38784 (d) 4848
- Q12. $5 + \sqrt{2} + \sqrt{3}$ is
 (a) a natural no. (b) an integer (c) a rational no. (d) an irrational no.
- Q13. If $\left(\frac{9}{7}\right)^3 \times \left(\frac{49}{81}\right)^{2x-6} = \left(\frac{7}{9}\right)^9$, then the value of x is
 (a) 12 (b) 9 (c) 8 (d) 6
- Q14. The number .211 2111 21111 211111... is a
 (a) terminating decimal
 (b) non-terminating repeating decimal
 (c) non-terminating decimal which is non-repeating
 (d) None of these
- Q15. If $m^n = 32$, where m and n are positive integers, then the value of n^{m^n} is
 (a) 32 (b) 25 (c) 5^{10} (d) 5^{25}

- Q16. Prime factorization of 64 is
 (a) 2^5 (b) 2^6 (c) 8×8 (d) 64×1
- Q17. If p is a prime number and p divides k^2 , then p divides
 (a) $2k^2$ (b) k (c) $3k$ (d) None of these
- Q18. If the HCF of 85 and 153 is expressible in the form of $85n - 153$, then the value of n is
 (a) 3 (b) 2 (c) 4 (d) 1
- Q19. Given that $\text{LCM}(91, 26) = 182$, then $\text{HCF}(91, 26)$ is
 (a) 13 (b) 26 (c) 7 (d) 9
- Q20. Out of the four numbers (i) $\left(\sqrt{5} - \frac{1}{\sqrt{5}}\right)^3$ (ii) $2.1231\overline{23}$ (iii) $2.123123\dots$
 (iv) $(2\sqrt{3} - \sqrt{2})(2\sqrt{3} + \sqrt{2})$, the irrational number is
 (a) i (b) ii (c) iii (d) iv
- Q21. $7 \times 11 \times 13 + 6$ is
 (a) a prime number (b) a composite number
 (c) an even number (d) None of these
- Q22. If $p^n = (a \times 5)^n$, for p^n to end with the digit zero $a = \underline{\hspace{2cm}}$ for any natural number n .
 (a) any natural no. (b) an odd no. (c) any even no. (d) None of these
- Q23. HCF is always
 (a) multiple of LCM (b) factor of LCM
 (c) divisible by LCM (d) Option a and c both
- Q24. $\text{HCF}(47, 61) =$
 (a) 2867 (b) 1 (c) 47 (d) 61
- Q25. $\text{LCM}(47, 61) =$
 (a) 2867 (b) 1 (c) 47 (d) 61

Chapter 02 - Polynomials

- Q01. The quadratic polynomials with the sum and the products of its zeroes as $\frac{1}{4}$ and -1 respectively, is
 (a) $4x^2 + x + 1$ (b) $4x^2 + x + 4$ (c) $4x^2 + x - 1$ (d) $4x^2 - x - 4$
- Q02. If $x^2 + \frac{1}{x^2} = 102$, then the value of $x - \frac{1}{x}$ is
 (a) 8 (b) 10 (c) 12 (d) 13
- Q03. The polynomial $p(x) = x^2 + 2x + 5x^3 - 3$ is
 (a) linear polynomial (b) cubic polynomial
 (c) constant polynomial (d) quadratic polynomial
- Q04. The quadratic polynomial, the sum and product of whose zeroes are -1 and 1 respectively, is
 (a) $x^2 - 1$ (b) $x^2 + 1$ (c) $x^2 + x$ (d) $x^2 - x$
- Q05. The zeroes of quadratic polynomial $t^2 - 15$ are
 (a) $-\sqrt{15}, \sqrt{15}$ (b) $\sqrt{15}, \sqrt{12}$ (c) $\sqrt{15}, -\sqrt{12}$ (d) $\sqrt{15}, -15$
- Q06. A quadratic polynomials, the sum and product of whose zeroes are $-\frac{1}{4}$ and $\frac{1}{4}$ respectively, is

- (a) $4x^2 + x + 1$ (b) $x^2 - 3x + 2$ (c) $x^2 + 3x - 2$ (d) None of these
- Q07. If $\left(x + \frac{1}{x}\right) = 3$, then $x^2 + \frac{1}{x^2}$ is equal to
 (a) $\frac{82}{9}$ (b) $\frac{10}{3}$ (c) 7 (d) 11
- Q08. If $x^{1/3} + y^{1/3} + z^{1/3} = 0$, then
 (a) $x + y + z = 0$ (b) $x + y + z = 3xyz$
 (c) $(x + y + z)^3 = 27xyz$ (d) $x^3 + y^3 + z^3 = 0$
- Q09. If $p(x) = 3x^2 - 5x$, then $p(2) =$ _____ :
 (a) 2 (b) 3 (c) 0 (d) None of these
- Q10. The quadratic polynomials whose zeroes are $\frac{3}{5}$ and $-\frac{1}{2}$, is
 (a) $10x^2 - x - 3$ (b) $10x^2 + x - 3$ (c) $10x^2 - x + 3$ (d) None of these

Chapter 03 - Pair of Linear Equations in two Variables

- Q01. The solutions of the equation $2x - y - 5 = 0$ are
 (a) $x = 2, y = -1$ (b) $x = 2, y = 1$ (c) $x = 1, y = -1$ (d) $x = -2, y = 1$
- Q02. The sum of digits of a two digit number is 9. Also, 9 times this number is twice the number obtained by reversing the order of the digits. The number is
 (a) 20 (b) 16 (c) 18 (d) None of these
- Q03. The system of equations $kx - y = 2$ and $6x - 2y = 3$ has a unique solution when
 (a) $k = 0$ (b) $k \neq 0$ (c) $k = 3$ (d) $k \neq 3$
- Q04. A boat can row 1 km with stream in 10 minutes and 1 km against the stream in 20 minutes. The speed of the boat in still water is
 (a) 1.5 km/hr (b) 3 km/hr (c) 3.4 km/hr (d) 4.5 km/hr
- Q05. A boat goes 24 km upstream and 28 km downstream in 6 hours. It goes 30 km upstream and 21 km downstream in 6 hours and 30 minutes. The speed of the boat in still water is
 (a) 4 km/hr (b) 6 km/hr (c) 10 km/hr (d) 14 km/hr
- Q06. Point (4, 3) lies on the line
 (a) $3x + 7y = 27$ (b) $7x + 2y = 47$ (c) $3x + 4y = 24$ (d) $5x - 4y = 1$
- Q07. The speed of train 150 m long is 50 km/hr. The time it will take to cross a platform 600 m long is
 (a) 50 sec (b) 54 sec (c) 60 sec (d) None of these
- Q08. The graph of an equation $y = -3$ is a line which will be
 (a) parallel to x-axis (b) parallel to y-axis
 (c) passing through origin (d) on x-axis
- Q09. The value of k for which $kx + 2y = 5$ and $3x + y = 1$ have unique solution, is
 (a) $k = -1$ (b) $k \neq 6$ (c) $k = 6$ (d) $k = 2$
- Q10. The graph of the equation $x - y = 0$ is
 (a) parallel to x-axis (b) parallel to y-axis
 (c) passing through origin (d) None of these

Chapter 04 - Quadratic Equations

- Q01. The general form of a quadratic equation is
 (a) $ax^2 + bx + c$ (b) $ax^2 + bx + c = 0$ (c) $a^2x + b$ (d) $ax^2 + bx + c = 0, a \neq 0$

- Q02. The number of possible solutions of a quadratic equation are
 (a) exactly two (b) at most two (c) at least two (d) None of these
- Q03. The discriminant of the equation $bx^2 + ax + c = 0$, $b \neq 0$ is given by
 (a) $b^2 - 4ac$ (b) $\sqrt{a^2 - 4bc}$ (c) $a^2 - 4bc$ (d) $\sqrt{b^2 - 4ac}$
- Q04. If the roots of a quadratic equation are equal, then the discriminant is
 (a) 1 (b) 0 (c) greater than 0 (d) less than 0
- Q05. The roots of $3x^2 - 7x + 4 = 0$ are
 (a) rationals (b) irrationals (c) positive integers (d) negative integers
- Q06. The roots of equation $x + \frac{16}{x} = 10$ are
 (a) 4, 6 (b) 4, 4 (c) 4, 5 (d) 2, 8
- Q07. If α, β are the roots of $x^2 + px + q = 0$, then the value of $\frac{\alpha}{\beta} + \frac{\beta}{\alpha}$ is
 (a) $\frac{p^2 - 2q}{q}$ (b) $\frac{2q - p^2}{q}$ (c) $\frac{p^2 + 2q}{q}$ (d) None of these
- Q08. If the roots of $ax^2 + bx + c = 0$ be equal, then the value of c is
 (a) $-\frac{b}{2a}$ (b) $\frac{b}{2a}$ (c) $-\frac{b^2}{4a}$ (d) $\frac{b^2}{4a}$
- Q09. If the sum of the roots of an equation is 6 and one root is $3 - \sqrt{5}$, then the equation is
 (a) $x^2 - 6x + 4 = 0$ (b) $x^2 - 4x + 6 = 0$ (c) $x^2 - 6x + 5 = 0$ (d) None of these
- Q10. If α, β be the roots of $ax^2 + bx + c = 0$, then the value of $\alpha^2 + \beta^2$ is
 (a) $\frac{b^2 - 2ac}{2a}$ (b) $\frac{b^2 - 4ac}{2a}$ (c) $\frac{b^2 - 2ac}{a^2}$ (d) $\frac{b^2 + 4ac}{2ac}$

Chapter 05 - Arithmetic Progression

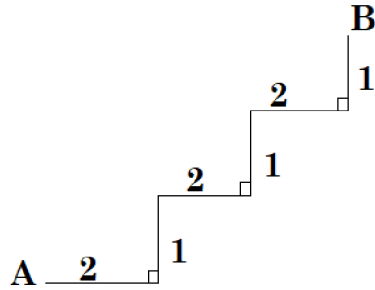
- Q01. If a, b, c are in A.P., then
 (a) $a + c = 2b$ (b) $b + a = 2c$ (c) $c = \frac{a+b}{2}$ (d) $a + c = b$
- Q02. Next term of the A.P. 9, 11, 13, 15, ... is
 (a) 20 (b) 17 (c) 18 (d) 19
- Q03. The sum of 6th and 7th terms of an A.P. is 39 and the common difference is 3, then the first term of A.P. is
 (a) 2 (b) -3 (c) 4 (d) 3
- Q04. The sum of three numbers in A.P. is 30. If the greatest is 13, then its common difference is
 (a) 2 (b) 4 (c) 5 (d) 3
- Q05. The 9th term from the end of the A.P. 7, 11, 15, ..., 147 is
 (a) 135 (b) 125 (c) 115 (d) 110
- Q06. The sum of first 10 natural numbers is
 (a) 50 (b) 60 (c) 55 (d) 65
- Q07. The common difference of the A.P. $8\frac{1}{8}, 8\frac{2}{8}, 8\frac{3}{8}, \dots$ is
 (a) $\frac{1}{8}$ (b) $1\frac{1}{8}$ (c) $8\frac{1}{8}$ (d) 1
- Q08. How many natural numbers up to 300 are divisible by 17?
 (a) 13 (b) 15 (c) 17 (d) 19
- Q09. The sum of first n natural number is

- (a) $0.5n(n+1)$ (b) $\frac{n^2}{2}$ (c) $n+2$ (d) $0.5+(n+1)$

- Q10. The fifteenth term of the arithmetic progression $-23, -19, -15, \dots$ is
 (a) 30 (b) 31 (c) 32 (d) 33

Chapter 06 - Triangles

- Q01. Given that $\triangle ABC \sim \triangle DEF$. If $DE = 2AB$ and $BC = 3$ cm, then EF is equal to
 (a) 12 cm (b) 2 cm (c) 1.5 cm (d) 6 cm
- Q02. See the figure given below. The straight line distance between A and B is



- (a) $5\sqrt{3}$ (b) 5 (c) $3\sqrt{5}$ (d) $5\sqrt{2}$
- Q03. In a triangle ABC, $\angle A = 25^\circ$ and $\angle B = 35^\circ$; $AB = 16$ units.
 In another triangle PQR, $\angle P = 25^\circ$ and $\angle Q = 35^\circ$; $PQ = 4$ units.
 Which of the following is true?
 (a) $\triangle ABC = \triangle PQR$ (b) $\triangle ABC \approx \triangle PQR$ (c) $\triangle ABC \cong \triangle PQR$ (d) $\triangle ABC \sim \triangle PQR$
- Q04. The altitude of an equilateral triangle, having the length of its side as 12 cm, is
 (a) $6\sqrt{2}$ cm (b) 6 cm (c) 8.5 cm (d) $6\sqrt{3}$ cm
- Q05. The triangles are similar, if
 (a) their corresponding angles are equal (b) their corresponding sides are proportional
 (c) Options 'a' and 'b' both are correct (d) there is at least one angle of 90°
- Q06. If in two triangles $\triangle DEF$ and $\triangle PQR$, $\angle D = \angle Q$ and $\angle R = \angle E$, then which of the following is **not** true?
 (a) $\frac{DE}{QR} = \frac{DF}{PQ}$ (b) $\frac{DE}{PQ} = \frac{EF}{RP}$ (c) $\frac{EF}{PR} = \frac{DF}{PQ}$ (d) $\frac{EF}{RP} = \frac{DE}{QR}$
- Q07. All the equilateral triangles are always _____.
 (a) Similar (b) Congruent (c) both (a) and (b) (d) None of these
- Q08. In $\triangle ABC$, D and E are points on the sides AB and AC respectively such that $DE \parallel BC$.
 If $\frac{AD}{DB} = \frac{2}{3}$ and $AC = 18$ cm, then AE is equal to
 (a) 5.2 cm (b) 6.2 cm (c) 7.2 cm (d) 8.2 cm
- Q09. In a right triangle ABC right angled at C, $AC = BC$. Then $AB^2 = \frac{\quad}{\quad} \times AC^2$.
 (a) 1 (b) 2 (c) 4 (d) None of these
- Q10. If the three sides of a triangle are $a, \sqrt{3}a$ and $\sqrt{2}a$, then the measure of the angle opposite to the longest side is
 (a) 60° (b) 90° (c) 45° (d) 30°

Chapter 07 - Coordinate Geometry

- Q01. P is a point on x-axis at a distance of 3 units from y-axis to its left. The coordinates of P are
 (a) (3, 0) (b) (0, 3) (c) (-3, 0) (d) (0, -3)

- Q02. The coordinates of the point where the line $\frac{x}{a} + \frac{y}{b} = 7$ intersects y-axis are
 (a) (a, 0) (b) (0, b) (c) (0, 7b) (d) (7a, 0)
- Q03. The area of the triangle OAB, the coordinates of the points A(4, 0), B(0, -7) and O is origin, is
 (a) 11 sq.units (b) 18 sq.units (c) 28 sq.units (d) None of these
- Q04. The line $\frac{x}{2} + \frac{y}{4} = 1$ intersects the axes at P and Q, the coordinates of the midpoint of PQ are
 (a) (1, 2) (b) (2, 0) (c) (0, 4) (d) (2, 1)
- Q05. The distance between the lines $2x + 4 = 0$ and $x - 5 = 0$, is
 (a) 9 units (b) 1 unit (c) 5 units (d) 7 units
- Q06. The distance between the points $(5 \cos 35^\circ, 0)$ and $(0, 5 \cos 55^\circ)$ is
 (a) 10 units (b) 1 unit (c) 5 units (d) 2 units
- Q07. If 'a' is any positive integer such that the distance between the points P(a, 2) and Q(3, -6) is 10 units, then the value of 'a' is
 (a) -3 (b) 6 (c) 9 (d) 3
- Q08. The perimeter of triangle formed by the points (0, 0), (2, 0) and (0, 2) is
 (a) 4 units (b) 6 units (c) $6\sqrt{2}$ units (d) $4 + 2\sqrt{2}$ units
- Q09. The points (1, 2), (-5, 6) and (a, -2) are collinear only, if a =
 (a) -3 (b) 7 (c) 2 (d) 5
- Q10. The two points of line segment are (a, b) and (-a, -b), then the length of the line is
 (a) $\sqrt{a^2 + b^2}$ (b) $2\sqrt{a^2 + b^2}$ (c) $\frac{2}{3}\sqrt{a^2 + b^2}$ (d) None of these

Chapter 08 - Introduction to Trigonometry

- Q01. If $x = r \sin \theta$ and $y = r \cos \theta$, then the value of $x^2 + y^2$ is
 (a) r (b) r^2 (c) $\frac{1}{r}$ (d) 1
- Q02. The value of $\operatorname{cosec} 30^\circ - \sec 60^\circ$ is
 (a) 0 (b) 1 (c) 90° (d) 50°
- Q03. If $3 \sec \theta - 5 = 0$, then $\cot \theta$ is equal to
 (a) $\frac{5}{3}$ (b) $\frac{4}{5}$ (c) $\frac{3}{4}$ (d) $\frac{3}{5}$
- Q04. If $\theta = 45^\circ$, then $\sec \theta \cot \theta - \operatorname{cosec} \theta \tan \theta$ is
 (a) 0 (b) 1 (c) $2\sqrt{2}$ (d) $\sqrt{2}$
- Q05. If $\cos \theta \times \frac{1}{\sec \theta} = 1$ and θ is an acute angle, then θ is
 (a) 90° (b) 60° (c) 30° (d) 0°
- Q06. Triangle TRY is a right angled isosceles triangle, then $\cos T + \cos R + \cos Y$ is
 (a) $\sqrt{2}$ (b) $2\sqrt{2}$ (c) $1 + 2\sqrt{2}$ (d) $1 + \frac{1}{\sqrt{2}}$
- Q07. If triangles ABC and PRT are similar such that $\angle C = \angle R = 90^\circ$ and $\frac{AC}{AB} = \frac{3}{5}$, then $\sin T$ is
 (a) $\frac{3}{5}$ (b) $\frac{5}{3}$ (c) $\frac{4}{5}$ (d) $\frac{5}{4}$
- Q08. If $k + 7 \sec^2 62^\circ - 7 \tan^2 62^\circ = 7$, then the value of k is

- (a) 1 (b) 0 (c) 7 (d) $\frac{1}{7}$

Q09. The value of $\cot^2 \theta - \left(\frac{1}{\sin \theta} \times \operatorname{cosec} \theta \right)$ is

- (a) 1 (b) 0 (c) 2 (d) -1

Q10. $\frac{\sin \theta}{\sqrt{1 - \sin^2 \theta}}$ can also be written as

- (a) $\cot \theta$ (b) $\sqrt{\sin \theta}$ (c) $\frac{\sin \theta}{\sqrt{\cos \theta}}$ (d) $\tan \theta$

Q11. If $\sin 30^\circ \tan 45^\circ = \frac{\sec 60^\circ}{k}$, then the value of k is

- (a) 1 (b) 2 (c) 3 (d) 4

Q12. $1 + \tan^2 \theta$ equals

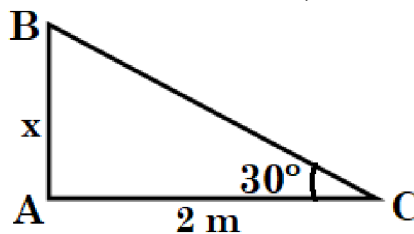
- (a) $\sec \theta$ (b) $\sec^2 \theta$ (c) $\sec 2\theta$ (d) $\cot^2 \theta$

Q13. If $\operatorname{cosec} \theta = \frac{13}{12}$, then

- (a) $\tan \theta = \frac{12}{5}$ (b) $\tan \theta = -\frac{5}{12}$ (c) $\tan \theta = \frac{12}{25}$ (d) $\tan \theta = \pm \frac{12}{25}$

Chapter 09 - Applications of Trigonometry

Q01. In the figure given below, if $AC = 2$ m and $BA = x$, then x equals



- (a) 1 m (b) 2 m (c) $\frac{2}{\sqrt{3}}$ m (d) $2\sqrt{3}$ m

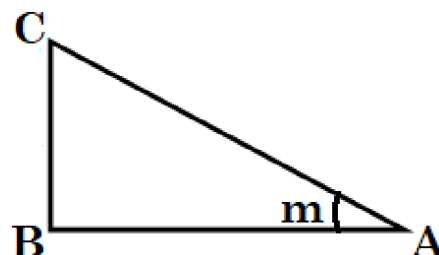
Q02. The angle of elevation of the top of a tower from the points at a distance of 4 m and 9 m from the base of the land in the same straight line with it, are complementary. Then the height of the tower is

- (a) 4 m (b) 7 m (c) 12 m (d) 6 m

Q03. The angle of elevation of the top of a tower from two points at distances 'a' and 'b' from the base and on the same straight line with it are complimentary. The height of the tower is

- (a) ab (b) \sqrt{ab} (c) $(ab)^2$ (d) $\frac{a}{b}$

Q04. In the figure given below, $\tan m = \frac{3}{4}$. If $AB = 12$ cm, then BC is

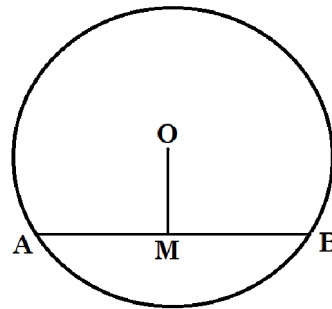


- (a) 8 cm (b) 12 cm
(c) 10 cm (d) 9 cm

- Q05. A tower stands vertically on the ground, from a point on the ground, which is 15 m away from the foot of the tower, the angle of elevation of the top of the tower is found to be 60° . The height of tower is
 (a) 3 m (b) $15\sqrt{3}$ m (c) 15 m (d) $3\sqrt{15}$ m

Chapter 10 - Circles

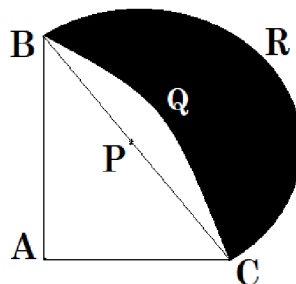
- Q01. The complement of 63° is
 (a) 118° (b) 28° (c) 38° (d) None of these
- Q02. The supplement of 60° is
 (a) 30° (b) 40° (c) 120° (d) None of these
- Q03. An angle which is greater than 180° but less than 360° is called
 (a) an acute angle (b) an obtuse angle (c) an adjacent angle (d) a reflex angle
- Q04. In the following figure, O is the centre of a circle and AB is chord of circle, whose length is 24 cm. If the length of the perpendicular OM on AB is 5 cm, the radius of the circle is



- (a) 10 cm (b) 12 cm
 (c) 13 cm (d) 14.5 cm
- Q05. A tangent PQ at a point P of a circle of radius 5 cm meets a line through the centre O at a point Q so that $OQ = 12$ cm. Length PQ is
 (a) 12 cm (b) 13 cm (c) 8.5 cm (d) $\sqrt{119}$ cm
- Q06. If the radius of the circle is 13 cm and the chord is 10 cm, then the length of the perpendicular drawn from the centre to the chord is
 (a) 12 cm (b) 13 cm (c) 8 cm (d) None of these


Chapter 11 - Areas Related to Circles

- Q01. In the given figure, ABC is quadrant of radius 14 cm and a semicircle is drawn taking BC as the diameter. The area of the shaded region is



- (a) 102 cm^2 (b) 98 cm^2 (c) 89 cm^2 (d) 201 cm^2
- Q02. If the biggest hand of a clock is 15 cm long, then the distance covered by it in 40 minutes will be
 (a) 31.5 cm (b) 72.8 cm (c) 24.1 cm (d) None of these
- Q03. The area of a triangle whose sides are respectively 3, 4 and 5 (in cm) is
 (a) 6 cm^2 (b) 60 cm^2 (c) 30 cm^2 (d) 10 cm^2
- Q04. The radius of circle is increased by 1 cm, then the ratio of the new circumference to the diameter is (if diameter of new circle is considered)

- (a) $\pi : 2$ (b) $\pi + 1$ (c) $\pi : 1$ (d) None of these
- Q05. A square and an equilateral triangle have equal perimeters. If the diagonal of the square is $6\sqrt{2}$ cm, then the area of the triangle is
 (a) $16\sqrt{2}$ cm² (b) $16\sqrt{3}$ cm² (c) $12\sqrt{2}$ cm² (d) None of these
- Q06. The area of a circle inscribed in an equilateral triangle is 48π sq.units. Then the perimeter of triangle (in units) is given as
 (a) $72\sqrt{3}$ (b) 72 (c) $48\sqrt{3}$ (d) 36
- Q07. The minute hand of a clock is $\sqrt{21}$ cm long. The area described by minute hand on the face of the clock between 7:00 am to 7:05 am is
 (a) 4.5 cm² (b) 6.6 cm² (c) 5.5 cm² (d) Can't be determined
- Q08. If the minute hands of two clocks are of length 3 cm and 4 cm respectively. The ratio of the areas in two clocks covered by the minute hands in $\frac{1}{2}$ hour will be
 (a) 9:16 (b) 4:9 (c) 16:9 (d) None of these
- Q09. From each corner of a square of sides 4 cm a quadrant of a circle of a radius 1 cm is cut and also a circle of a diameter 2 cm is cut. The area of the remaining portion of the square is (see the figure)



- (a) 10.25 cm² (b) 9.72 cm² (c) 11.52 cm² (d) None of these

Chapter 12 - Surface Areas and Volumes

- Q01. The curved surface area (in sq. units) of a cylinder with the diameter 2 units and height of 1 unit is
 (a) π (b) 2π (c) 3π (d) 4π
- Q02. The volume (in cubic units) of cylinder of radius and height both of 1 unit is given by
 (a) π (b) 2π (c) 3π (d) 4π
- Q03. The volume (in cubic units) of cone of radius and height both of 1 unit is given by
 (a) π (b) 2π (c) $\frac{\pi}{3}$ (d) 3π
- Q04. The area of an equilateral triangle is $\sqrt{3}$ m², then its side is
 (a) $3\sqrt{3}$ m (b) $\frac{3\sqrt{3}}{4}$ m (c) 2 m (d) 4 m
- Q05. Volume of the cubes is in the ratio of 8:125. The ratio of their surface areas is
 (a) 8:125 (b) 2:5 (c) 4:25 (d) 16:25
- Q06. Volume (in cubic units) of a sphere of radius 3 units is given by
 (a) 18π (b) 36π (c) 36 (d) 54π
- Q07. Diameter of a sphere is 6 cm. It is melted and drawn into a wire of radius 0.2 cm. Then the length of the wire is

- (a) 6 cm (b) 700 cm (c) 900 cm (d) None of these
- Q08. The surface area of the walls of a cuboidal room is
 (a) $2(l + b + h)$ (b) $l b h$ (c) $2(l b + b h + l h)$ (d) $2(l + b) h$
- Q09. If a right circular cone of vertical height 12 cm has a volume of 616 cm^3 , then the radius of its base is
 (a) 6 cm (b) 7 cm (c) 8 cm (d) 9 cm
- Q10. If all the sides of a cube are doubled, then its area will become
 (a) 2 times (b) 3 times (c) 4 times (d) 8 times

Chapter 13 - Statistics

- Q01. Weight of 40 eggs were recorded as given below.

Weights (in gm)	85-89	90-94	95-99	100-104	105-109
No. of eggs	10	12	12	4	2

The lower limit of the median class is

- (a) 90 (b) 95 (c) 94.5 (d) 89.5
- Q02. Mode is the value of the variable which has
 (a) maximum frequency (b) minimum frequency
 (c) mean frequency (d) middle-most frequency
- Q03. The relationship between mean, median and mode for a moderately skewed distribution is
 (a) mode = median – 2 mean (b) mode = 3 median – 2 mean
 (c) mode = 2 median – 3 mean (d) mode = median – mean
- Q04. What is the mode if mean and median are 10.5 and 9.6 respectively?
 (a) 7 (b) 7.8 (c) 8 (d) 8.4
- Q05. Mode and mean of a data are 12k and 15k respectively. Then the median of the data is
 (a) 16k (b) 15k (c) 12k (d) 14k

Chapter 14 - Probability

- Q01. If E is an event, then the value of $P(E) + P(\bar{E})$ is
 (a) 0 (b) 1 (c) 2 (d) None of these
- Q02. If P(E) is 38% for an event E, then the probability of failure of this event is
 (a) 12% (b) 62% (c) 100% (d) 0
- Q03. In a survey, it is found that every fifth person possess a vehicle. The probability of a person ‘not possessing the vehicle’ is
 (a) $\frac{1}{5}$ (b) $\frac{4}{5}$ (c) $\frac{3}{5}$ (d) 1
- Q04. Which of the following can't be the probability of an event?
 (a) $\frac{2}{3}$ (b) $-\frac{1}{5}$ (c) 15 % (d) 0.7
- Q05. If ‘p’ is the probability of an impossible event, then p =
 (a) $\frac{2}{3}$ (b) 0.1 (c) 1 (d) 0
- Q06. The probability of a sure event is
 (a) 0 (b) 1 (c) 2 (d) None of these
- Q07. What is the probability that an ordinary year has 53 Sundays?
 (a) $\frac{6}{13}$ (b) $\frac{1}{7}$ (c) $\frac{2}{7}$ (d) $\frac{3}{8}$

- Q08. A bag contains 9 red, 7 white and 4 black balls. A ball is drawn randomly. The probability that the 'ball drawn is not red' is
 (a) $\frac{9}{20}$ (b) $\frac{9}{11}$ (c) $\frac{2}{11}$ (d) $\frac{11}{20}$
- Q09. If a die is thrown, and the probability of getting a number less than 5 is given by p, then which of the following is true for p?
 (a) 1 (b) 0 (c) $0 < p < 1$ (d) $p > 1$
- Q10. If red face cards are removed from the deck of 52 playing cards, then the probability of getting a black jack is
 (a) $\frac{2}{46}$ (b) $\frac{2}{52}$ (c) $\frac{4}{48}$ (d) $\frac{2}{23}$



Please Scan the QR-Code to buy most popular CBSE Maths books for Grades X, XI & XII to help in your preparation!

#WE-ARE-ON-MISSION

MATHMISSION FOR X (2026-27 Edition)

For CBSE Exams ▪ Maths (Standard & Basic)

By O.P. Gupta (Indira Award Winner)

- ✦ Detailed Theory with Examples
- ✦ Subjective type Questions (Chapter-wise : 2, 3 & 5 Markers)
- ✦ H.O.T.S. Questions
- ✦ COMPETENCY FOCUSED QUESTIONS
 - ☑ Multiple Choices Questions (Chapter-wise)
 - ☑ Assertion-Reason (A-R) Questions (Chapter-wise)
 - ☑ Case Study / Passage Based Questions (Chapter-wise)
- ✦ ANSWERS & SOLUTIONS* of all Questions
- ❶ SELECTED H.O.T.S. Questions from 2026 & 2025 Exams.



- ✦✦ This FREE PDF is being shared to HELP teachers and students of class X. We've added over 1130 Multiple Choice Questions (MCQs) in our MATHMISSION FOR X Book by O.P. GUPTA.
- ✦ MATHMISSION Books for Classes XII & XI are also available!
- ◆ You can buy our books on Amazon / Flipkart or, message us on WhatsApp @ +919650350480.

For Bulk order related queries at Discounted Price, Please contact by WhatsApp @ +91 9650350480 (only message)

CLASS

10

Standard & Basic

Aligned with NEP 2020 & NCFSE 2023

BASED ON NCERT TEXTBOOK &
LATEST CBSE SYLLABUS FOR 2026-27

Mathmission



POWERED BY AI

Includes

**** 100% Authentic **

CBSE Board

2026 Questions

1 COMPLETE THEORY WITH EXAMPLES

2 SUBJECTIVE TYPE QUESTIONS

3 COMPETENCY FOCUSED QUESTIONS

4 MULTIPLE CHOICE QUESTIONS

5 ASSERTION - REASON QUESTIONS

6 CASE STUDY & PASSAGE BASED QUESTIONS

O.P. GUPTA

INDIRA AWARD WINNER

BASED ON LATEST CBSE
SYLLABUS & NCERT TEXTBOOK
FULLY UPDATED FOR THE
SESSION 2026-27

POWERED BY



MATHMISSION

FOR X

MATHEMATICS
(Standard & Basic)

O.P. GUPTA

MATHS (H.), E & C ENGINEERING
INDIRA AWARD WINNER



Published by

MATHEMATICA

THE O.P. GUPTA ADVANCED MATH CLASSES
1st Floor of 1625 D 4/A, Opp. HP Petrol Pump, Thana
Road, Najafgarh, New Delhi-43

Third Edition

Latest 2026-27 Edition Based on New Pattern

Wednesday, March 25, 2026

© All Rights Reserved with O.P. Gupta
Copyright © Author

Price : ₹ 999/-

ISBN

978-93-340-8261-6

Printed by
Print Care, Delhi-110092

CAUTION


No part of this book or the complete book should be reproduced or copied in any form [photocopying, selling by any third party, resold, restored by information storage devices, or as the notes by any person(s)] without the prior consent of the author. Doing so will be considered as the intellectual theft and will deprive the author of his due credit for his work. Further if anyone is found sharing PDF of any portion of this Book via WhatsApp, Telegram or other digital / online mode without written consent of the author, s/he will be liable to face the relevant Indian laws.

REMARK

While we have taken all possible care in the editing, proof reading and printing of this book, still some errors might have crept in. The author should not be held responsible for any misprint/omission. We shall feel grateful for the suggestions received from the readers for the further improvement of the book.

Schools, Coaching Institutes
& Tutors may get **Discounted
Price for Bulk-orders** on our
Mathematics Books.

To know more, message on
WhatsApp @ +919650350480



O.P. GUPTA

Math Mentor Indira Award Winner

OUR OTHER USEFUL PUBLICATIONS

- MATHMISSION FOR XII
- MATHMISSION FOR XI
- CBSE 39 SAMPLE PAPERS FOR XII
- CBSE YODDHA SAMPLE PAPERS FOR XI
- CBSE UMANG SAMPLE PAPERS FOR X
- NTA-CUET (UG) MATHS QUESTION BANK

MENTORS OF MATHMISSION

Mr Prabhat Marwaha

M.Sc. (Maths), B.Ed.

(37 Years Experience)

Former Principal, Jawahar Navodaya Vidyalaya,
Pipersand, Lucknow

Mr Pankaj Chugh

M.Sc. (Maths), M.Phil. (Maths), B.Ed.

(36 Years Experience)

DAV Public School, Paschim Vihar
Edu-Maths, Sec. 18, Rohini, Delhi

Dr Amit Bajaj

M.Sc. (Maths), M.A. (Education), B.Ed.

(26 Years Experience)

Senior Maths Faculty
CRPF Public School, Rohini, Delhi

Ms Ashita Mehta

M.Sc. (Maths), B.Ed.

(21 Years Experience)

PGT (Maths)

GD Goenka Public School, Indirapuram

WE ARE A TEAM

Mr Ajay Kumar Singh

Vice Principal, Jawahar Navodaya
Vidyalaya, Sirmour, Rewa

M.Sc., M.Phil., B.Ed., CSIR-UGC NET
Qualified in Mathematics

Ms Kanupreet Khanna

MA Economics, B.Ed.

(18 Years Experience)

TGT (Maths)

Sneh International School, Delhi

Mr Srihari Doddaka

M.Sc. (Maths), B.Ed.

(17 Years Experience)

HOD & PGT (Maths)

Narayana Educational Institutions,

Narayana E-Techno School, Chennai

Ms Priti Gupta

M.Sc. (Maths), B.Ed.

(29 Years Experience)

PGT (Maths)

Army Public School, Noida

Mr Vishal Minocha

B.A. (Maths), B.Ed., Dip. M.E.,

(28 Years Experience)

Vishal Institute, Sec. 3, Rohini

Ms Neenu Handa

M.Sc. (Maths)

(13 Years Experience)

TGT (Maths)

Seth Anandram Jaipuria School,

Vasundhara, Ghaziabad

Ms Sarabjeet Kaur

M.Sc. (Maths), MCA, B.Ed.

(26 Years Experience)

PGT (Maths)

Career+ Academy, Noida

Ms Heena Arya

M.Sc. (Maths), B.Ed.

(11 Years Experience)

PGT (Maths)

Dynasty International School, Faridabad

Mr Sachin Pandey

M.Sc. (Maths), B.Ed.

(19 Years Experience)

PGT Maths & Coordinator

St. Mary's Sr. Sec. School,

Rudrapur, Uttarakhand

Ms Daljeet Kaur

M.Phil. (Maths)

(21 Years Experience)

PGT (Maths)

Morning Star St. Anslem's Sr. Sec.

School, Jaipur

Ms Dharini Dave

B.E., M.Sc. (Maths), B.Ed.

(11 Years Experience)

PGT (Maths)

Countryside International

School, Surat

Following are the Books for CBSE XII, XI & X (2026-27) by O.P. Gupta.

 **MATHMISSION FOR XII, XI & X (Latest Edition)**

For CBSE 2027 Exams ▪ Maths (041)

By **O.P. Gupta (Indira Award Winner)**

- ✦ Detailed Theory with Examples
- ✦ Subjective type Questions (Chapter-wise : 2, 3 & 5 Markers)
- ✦ H.O.T.S. Questions from recent CBSE 2026 & 2025 Exams
- ✦ **COMPETENCY FOCUSED QUESTIONS**
 - ☑ Multiple Choices Questions (Chapter-wise)
 - ☑ Assertion-Reason (A-R) Questions (Chapter-wise)
 - ☑ Case Study / Passage Based Questions (Chapter-wise)
- ✦ **ANSWERS** of all Questions


 **SOLUTIONS OF MATHMISSION FOR XII & XI (Latest Edition)**


For CBSE 2027 Exams ▪ Maths (041)


By **O.P. Gupta (Indira Award Winner)**

- ✦ **Step-by-Step Detailed Solutions of all the Exercises of MATHMISSION FOR XII & XI**

① Books are available on Amazon / Flipkart / Theopgupta.com
For **Discounted Price**, order on WhatsApp @ +919650350480.

 This is only a **Demo sample file** of MATHMISSION FOR X (2026-27).
The contents shown in this Document are just glimpses of what we have provided in the Printed book.

 **You may Share this Document with any class X Student and Teacher.**



A BRIEF SYNOPSIS Of CONTENTS IN

MATHMISSION FOR X

For CBSE 2026-27 Exams
(Maths - Standard & Basic)

By O.P. Gupta
Indira Award Winner

- ★ Detailed Theory with Examples
- ★ Subjective type Questions (2, 3 & 5 Markers)
- ★ H.O.T.S. Questions from recent CBSE 2026 & 2025 Exams
- ★ **COMPETENCY FOCUSED QUESTIONS**
 - ☑ Multiple Choices Questions (Chapter-wise)
 - ☑ Assertion-Reason (A-R) Questions (Chapter-wise)
 - ☑ Case Study / Passage Based Questions (Chapter-wise)
- ★ **ANSWERS** of all Questions

MATHMISSION Books are also available for the Classes XII & XI.

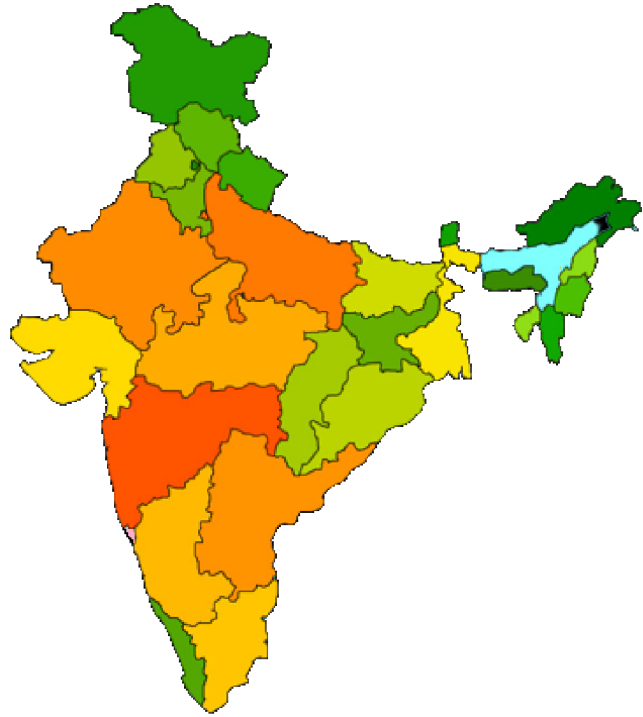
◆ Books are available on **Amazon / Flipkart**.

📖 For latest Math-Lectures, visit on
YouTube.com/@theopgupta

For order related queries, please contact on
WhatsApp @ +91 9650350480 (only message)

Discounted price available for Bulk orders.

SHARE WITH TEACHERS & STUDENTS ALSO TO HELP THEM IN THEIR PREPARATION



OUR BOOKS HAVE GONE TO VARIOUS STATES OF INDIA & ABROAD

- Jammu & Kashmir
- Himachal Pradesh
- Punjab
- Chandigarh
- Rajasthan
- Delhi
- Haryana
- Uttarakhand
- Uttar Pradesh
- Bihar
- Jharkhand
- Odisha
- West Bengal
- Goa

- Assam
- Tripura
- Madhya Pradesh
- Chhattisgarh
- Gujarat
- Telangana
- Andhra Pradesh
- Maharashtra
- Karnataka
- Tamilnadu
- Kerala
- Puducherry
- Andaman & Nicobar Islands
- Daman & Diu

MATHMISSION @ FOREIGN LOCATIONS

- Oman
- Doha (Qatar)
- Saudi Arabia
- Dubai
- Singapore



MATHEMATICIA BY O.P. GUPTA

...a name you can bank upon!



Feel Safe to **Share this Document** with other math scholars


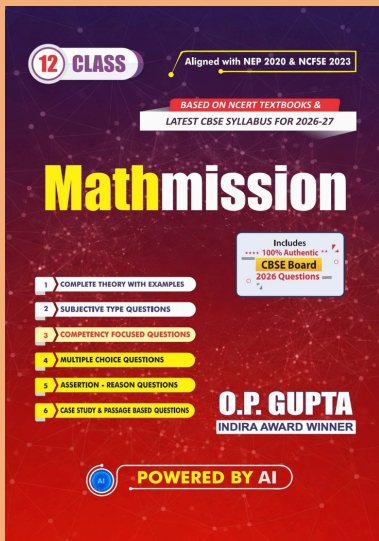
CLICK NOW

TO Download



**FREE PDF TESTS AND
ASSIGNMENTS OF THE
CLASSES XII, XI & X**

or, just type -
theopgupta.com



Click on the
Book cover
to buy!



Many **Direct Questions**
from our **Books** have
been asked frequently in
the recent **CBSE Exams.**

Latest 2026-27 Edition
**MATHMISSION
FOR XII, XI & X**
By **O.P. GUPTA**

Buy our
books on
amazon
Flipkart

Join Our Mathematics Learning & Teachers Community

To support **collaborative learning and resource sharing** in Mathematics, dedicated WhatsApp groups have been created for:

Maths Teachers Community	Students of Classes XI & XII	Students of Classes IX & X
		

These groups aim to share:

- ✓ Quality Mathematics Resources
- ✓ Board Exam Discussions & Solutions
- ✓ Important Practice Questions & Updates
- ✓ Healthy Academic Interaction

① How to Join?

Please **scan the QR-Code** corresponding to your category (Teachers / Class IX - X Students / Class XI - XII Students) to join the relevant group.

Alternatively, you can **touch the QR-Code** too, after opening in the Drive PDF App.

✪ Important Guidelines

- Teachers are requested NOT to join student groups.
- Students are requested NOT to join teachers' groups.

☑ If you are already a member of any of our existing groups, please avoid joining another group to prevent repeated notifications of the same resources.

Instead, you may share this opportunity with your colleagues or students who may benefit from these Mathematics learning communities.

With Regards

O.P. Gupta

Author - Mathmission Series of Books

Founder & Mentor

THE O.P. GUPTA ADVANCED MATH CLASSES

@ Thana Road, Najafgarh, New Delhi

■ WhatsApp: +91 9650350480



Dedicated to helping students and teachers strengthen conceptual understanding and excel in Mathematics.



ABOUT THE AUTHOR

O.P. GUPTA having taught math passionately over a decade, has devoted himself to this subject. Every book, study material or practice sheets, tests he has written, tries to teach serious math in a way that allows the students to learn math without being afraid. Undoubtedly his mathematics books are best sellers on [amazon](#) and [Flipkart](#).

His resources have helped students and teachers for a long time across the country. He has contributed in CBSE Question Bank (issued in April 2021). Mr Gupta has been invited by many educational institutions for hosting sessions for the students of senior classes. Being qualified as an electronics & communications engineer, he has pursued his graduation later on with mathematics from University of Delhi due to his passion towards mathematics. He has been honored with the prestigious INDIRA AWARD by the Govt. of Delhi for excellence in education.

MOST REPUTED MATHEMATICS BOOKS

MATHMISSION & SOLUTIONS

CLASS 12



CLASS 11



CLASS 10



Our All-inclusive Refresher-guide Feature



- ✓ Theory & Examples
- ✓ Subjective Questions



- ✓ Multiple Choice Questions
- ✓ Assertion Reason Questions




- ✓ Case Study Questions
- ✓ Answers for Exercises



- ✓ Detailed Step-by-step Solutions
- ✓ QR-Codes for more Resources

MOST TRUSTED SAMPLE PAPERS & CUET Practice Book



Our popular Sample Papers Guides feature

- Official CBSE Sample Papers with Solutions
- Plenty of Fully Solved Sample Papers
- Different Levels of Sample Papers
- Unsolved Sample Papers for Practice

MATH – Lectures, Tests, Sample Papers...
Queries Regarding Maths?

Feel free to contact us
✉ iMathematicia@gmail.com
☎ +919650350480 (Message only)



Visit our YouTube Channel

MATHEMATICIA BY O.P. GUPTA

FREE PDF
DOWNLOADS



theopgupta.com

CBSE Board Papers, Sample papers,
Topic Tests, Assignments & More...



BUY OUR BOOKS ONLINE

[amazon](#) [Flipkart](#) [f](#)

